



M.H. Smith Memorial School

HOLIDAY HOMEWORK (2023-2024)

Name – _____

Class – 3

Sec – _____

"Laughing cheerfulness throws the light of day on all the paths of life."



HAPPINESS



Dear children, it is holiday time again. A time for fun. A time to relax and enjoy a dip in the pool! A time to play, a time to go for long holiday trips! Yes! Fun time is back and in order to help you learn while you enjoy, we have designed some interesting Holiday Homework that will draw you closer to nature, and your loved ones and make you happy.

Please follow the simple instructions given below to compile and present your **homework in an attractive handmade folder. You can use old newspapers to make the folder. Plastic folders and plastic files are prohibited.**

1. Make an attractive cover for your folder and relate it to the theme- **HAPPINESS.**
2. Make sure all your holiday homework is done on A4 size sheets and should be compiled subject-wise.
3. Create an index or contents page and various sections like English, Hindi, Maths, Science, Social Studies, Computer, and Arts.
3. The child will be assessed for the presentation, neatness, completion of all the given questions, and timely submission.
4. Revise all subjects as it will help you for future assessments.

SOCIAL STUDIES


ACTIVITY-1

I LOVE MY HOUSE AND MY FAMILY IS UNIQUE:

- **Record a video of the interview of your grandparents or parents of 1 min and upload on your class teacher's personal whatsapp number and find out**
 - I. **any two similarities between the habits of your family members and write them and find out**
 - II. **any two customs/practices followed by your family members, note them down.**
- **Draw 5 parts of your dream house**
- **Design a map for your dream house**
- **Write reasons why your house is unique**
- **Make a project on any one topic from your social studies book.**

5 Things I Love About Myself

Directions:
You are an Awesome Person!
In the circles below, write 5
things you just love
about yourself!



Happiness Speaking Activity

Exercise 1: Ask and answer the questions below in pairs.

1. Tell me about a happy moment in your childhood.

2. What kind of things make you happy?



3. Who in your life makes you feel happy? How? What do they do?

4. Is International Day of Happiness celebrated in your country? If not, do you think it should be?

5. Do you know anyone who is always happy and positive? Why do you think that is?

6. Do you think there is too much pressure nowadays to be happy all the time?

7. If you could plan your perfect day, what would you do?



8. Do you believe we are born with a positive/negative outlook on life, or is it due to people's life experiences?

9. It is said that Finland has the happiest population. Why do you think that might be?

10. Would you be satisfied as a stay-at-home parent, without working outside the home?

11. Do you need a lot of money to be happy?



12. What can you do now that will make you happy in 5/10 years?

13. Do you let others affect your happiness, or are you good at letting go of negative things people say to you?

14. Do you think happiness has a different meaning for everybody? What does it mean for you?

15. What do you do to look after your mental health?



Exercise 2: In pairs, discuss the meaning of the quotes below and if you agree/disagree with them.

1. *Happiness will never come to those who fail to appreciate what they already have.* ~ Gautama Buddha
2. *True happiness is to enjoy the present, without anxious dependence of the future.* ~ Seneca
3. *It is difficult to find happiness within oneself, but it is impossible to find it anywhere else.* ~ Arthur Schopenhauer
4. *The good we do today becomes the happiness of tomorrow.* ~ William James
5. *The happiness of your life depends upon the quality of your thoughts.* ~ Marcus Aurelius
6. *The time to be happy is now. The place to be happy is here. The way to be happy is to make others so.* ~ Robert Green Ingersoll



SCIENCE

- Collect the pictures of the five extinct animals and five extinct birds and write two sentences on each of them.
- Write a few things that you can do to show that you care for animals and birds in your neighbourhood. Ask some elders to click this act of your kindness while you are helping or feeding animals/birds and attach it with homework.
- We can learn a lot of life lessons from birds, like waking up early in the morning and being active. Write a few more things that one can learn from the birds.
- Make a project on any one topic from your science book.

Mark 15 words with the help of the help box given below

I	T	S	X	C	H	I	C	K	E	N	B
H	B	Q	O	W	H	A	L	E	T	Q	A
R	C	U	L	M	M	O	N	K	E	Y	K
B	W	I	S	N	A	I	L	E	O	Y	Y
U	C	R	A	Y	J	M	O	U	S	E	E
T	A	R	R	G	S	H	A	R	K	L	L
T	T	E	M	I	L	L	I	P	E	D	E
E	F	L	S	G	I	R	A	F	F	E	P
R	I	W	N	U	E	Q	X	X	C	B	H
F	S	C	A	A	S	C	K	B	L	E	A
L	H	K	K	N	E	H	O	R	S	E	N
Y	B	Q	E	A	E	G	D	U	C	K	T

duck

monkey

giraffe


elephant

butterfly

horse

snail

millipede



whale

shark

catfish

chicken

squirrel

mouse

snake

iguana

LEARN AND USE THESE WORDS



★ Amused

We were all amused at his stories.

★ Blissful

We spent a blissful week together.

★ Bright

She gave me a bright smile.

★ Charmed

I was charmed with her beauty.

★ Cheerful

She is cheerful in spite of his illness.

★ Contented

He was a contented man.

★ Eager

He was eager to get into politics.

★ Ecstatic

Sophie was ecstatic about her new job.

★ Elated

They were elated at the result.

★ Enthusiastic

The violinist got an enthusiastic encore.

★ Excited

They were very excited.

★ Exultant

Whooh! The exultant joy of survival.

★ Gleeful

I had not seen my father so gleeful.

★ Hopeful

She is hopeful of returning to work soon.

★ Joyful

She gave a joyful laugh.

★ Lively

He showed a lively interest in politics.

★ Loving

She chose the present with loving care.

★ On cloud nine

I was on cloud nine when I got in to Harvard.

★ Optimistic

He is optimistic about the future.

★ Overjoyed

He was overjoyed at my success.

★ Pleased

I am pleased that you have a new job.

★ Positive

I wish you'd be more positive.

★ Satisfied

She's never satisfied with what she's got.

★ Thrilled

I was thrilled to be invited.

ENGLISH

- Write a small poem in your scrap book on “Happiness”. Also paste the pictures of the things that make you happy.
- Prepare a journal, observe and write one thing that makes you and the people around you happy, every day.
- Design a colourful poster for a rally to promote happiness and peace in our country. Frame meaningful slogans and paste pictures or make colourful drawings to highlight your message.
- Read first 2 stories of the reader “Caught Red Handed”.
- Do 10 pages of pattern writing in an old English notebook.
- Fun Activity – Me and my EMOTIONS

FEELINGS REVIEW

Join the image with the correct word.



BORED



SCARED



SURPRISED



SLEEPY



SAD




HAPPY



Happy Days

Happiness can look different for everyone.

- What does your face look like when you're happy? Draw it




- Write and draw 4 things that make you feel happy.

- Write and draw 4 ways in which you express that you are happy.

Activity

Color the pictures and write the names of your friends with whom you are happy along with the reasons for your happiness.



Name	Gender	Age	Reasons for your happiness

- Interview six of your friends or family members and find out what's happiness to them.

Name	What's happiness to you?
1.	
2.	
3.	
4.	
5.	
6.	

- Choose 2 adjectives. Ask three of your friends what makes them feel that way.

Excited	Tired	Crazy	Sleepy	Bored	Worried	Nervous
Happy	Surprised	Sad	Angry	Scared	Shy	Comfortable

Friend 1: _____
 _____ makes him/her _____
 _____ makes him/her _____

Friend 2: _____
 _____ makes him/her _____
 _____ makes him/her _____

Friend 3: _____
 _____ makes him/her _____
 _____ makes him/her _____

What Do I Need To Be Safe and Happy?

Everybody deserves to have a safe and happy life. What do you think you need to make this happen? Think about practical ideas, like a house, enough food and water, clothes and shoes. Then think about what we need in other ways. Do we need love, cuddles, to be made to feel special and valued by others? Think and fill the worksheet.

Things that make you feel SAFE

A thought bubble with five horizontal lines for writing.

Things that make you HAPPY

A thought bubble with five horizontal lines for writing.

A thought bubble with five horizontal lines for writing.

A thought bubble with five horizontal lines for writing.



MATHS

- Write down the last 4-digit number of mobile phones of any 5 people around you and then write their:
 - a. Number Name
 - b. Expanded Form
 - c. Ascending Order
 - d. Descending Order
 - e. Greatest Number
 - f. Smallest Number

Numbers – _____ , _____ , _____ ,
_____ , _____

Expanded Form –

- a. _____ = _____
- b. _____ = _____
- c. _____ = _____
- d. _____ = _____
- e. _____ = _____

Ascending Order - _____

Descending Order - _____

Greatest Number - _____ Smallest Number - _____

- Count how many times you smile in a day.

MAY 2023

SUN	MON	TUE	WED	THU	FRI	SAT
21	22	23	24	25	26	27
28	29	30	31			



- Make a creative and innovative ABACUS with any waste material available at home.

Find the missing numbers:

1) $0 + \underline{\quad\quad} + 700 + 80 = 1,780$

2) $4 + 4,000 + \underline{\quad\quad} + 20 = 4,824$

3) $6,000 + \underline{\quad\quad} + 70 + 7 = 6,177$

4) $\underline{\quad\quad} + 700 + 40 + 4 = 7,744$

5) $400 + 90 + 7,000 + \underline{\quad\quad} = 7,495$

6) $\underline{\quad\quad} + 0 + 9,000 + 10 = 9,018$

7) $0 + \underline{\quad\quad} + 0 + 3,000 = 3,080$

8) $\underline{\quad\quad} + 90 + 800 + 6,000 = 6,899$

9) $5 + 0 + \underline{\quad\quad} + 3,000 = 3,605$

10) $6 + \underline{\quad\quad} + 700 + 8,000 = 8,776$

Determine the Place Value of the underlined digits.

1. $\underline{2}29 = \underline{\quad\quad\quad}$

2. $3\underline{1} = \underline{\quad\quad\quad}$

3. $6,8\underline{1}9 = \underline{\quad\quad\quad}$

4. $2\underline{1}1 = \underline{\quad\quad\quad}$

5. $\underline{1},660 = \underline{\quad\quad\quad}$

6. $7,8\underline{1}7 = \underline{\quad\quad\quad}$

7. $70\underline{3} = \underline{\quad\quad\quad}$

8. $2,\underline{6}77 = \underline{\quad\quad\quad}$

9. $4\underline{1} = \underline{\quad\quad\quad}$

10. $\underline{9}0 = \underline{\quad\quad\quad}$

Compare the numbers. Add: > or < or =

1. 1,668 ___ 1,717

2. 5,971 ___ 9,237

3. 3,699 ___ 2,942

4. 656 ___ 502

5. 5,669 ___ 5,128

6. 4,966 ___ 3,252

7. 6,721 ___ 1,034

8. 4,146 ___ 8,202

9. 2,722 ___ 6,629

10. 7,980 ___ 9,187

3)Write the greatest and the smallest 4 – digit number in the given digits :

<u>Digits</u>	<u>Greatest number</u>	<u>Smallest number</u>
8, 0, 3, 9		
1, 9, 4, 3		
8, 4, 6, 1		
3, 4, 8, 1		
1, 6, 8, 3		
3, 3, 9, 6		

Skip counting by 150's

1. Count by 150 from 0 to 5250

0		300			
			1,350	1,500	1,650
	2,850				
					4,350
					5,250



Adding 4-digit numbers in columns

Find the sum.

$$\begin{array}{r} 1. \quad 7,340 \\ + 9,473 \\ \hline \end{array}$$

$$\begin{array}{r} 2. \quad 3,026 \\ + 2,689 \\ \hline \end{array}$$

$$\begin{array}{r} 3. \quad 125 \\ + 867 \\ \hline \end{array}$$

$$\begin{array}{r} 4. \quad 6,804 \\ + 651 \\ \hline \end{array}$$

$$\begin{array}{r} 5. \quad 6,774 \\ + 7,826 \\ \hline \end{array}$$

$$\begin{array}{r} 6. \quad 1,762 \\ + 3,722 \\ \hline \end{array}$$

$$\begin{array}{r} 7. \quad 9,778 \\ + 1,226 \\ \hline \end{array}$$

$$\begin{array}{r} 8. \quad 4,400 \\ + 4,474 \\ \hline \end{array}$$

$$\begin{array}{r} 9. \quad 7,942 \\ + 9,798 \\ \hline \end{array}$$

$$\begin{array}{r} 10. \quad 7,559 \\ + 8,529 \\ \hline \end{array}$$

$$\begin{array}{r} 11. \quad 7,274 \\ + 4,558 \\ \hline \end{array}$$

$$\begin{array}{r} 12. \quad 8,704 \\ + 222 \\ \hline \end{array}$$

$$\begin{array}{r} 13. \quad 5,536 \\ + 5,619 \\ \hline \end{array}$$

$$\begin{array}{r} 14. \quad 290 \\ + 4,342 \\ \hline \end{array}$$

$$\begin{array}{r} 15. \quad 8,519 \\ + 9,033 \\ \hline \end{array}$$

$$\begin{array}{r} 16. \quad 491 \\ + 1,091 \\ \hline \end{array}$$

4-DIGIT SUBTRACTION SHEET 1

Have a go at these subtraction problems with regrouping.

$$\begin{array}{r} 1) \quad 5243 \\ - 2126 \\ \hline \end{array}$$

$$\begin{array}{r} 2) \quad 3531 \\ - 1125 \\ \hline \end{array}$$

$$\begin{array}{r} 3) \quad 4257 \\ - 2134 \\ \hline \end{array}$$

$$\begin{array}{r} 4) \quad 2483 \\ - 1631 \\ \hline \end{array}$$

$$\begin{array}{r} 5) \quad 7258 \\ - 4636 \\ \hline \end{array}$$

$$\begin{array}{r} 6) \quad 5733 \\ - 2015 \\ \hline \end{array}$$

$$\begin{array}{r} 7) \quad 8445 \\ - 723 \\ \hline \end{array}$$

$$\begin{array}{r} 8) \quad 6508 \\ - 3254 \\ \hline \end{array}$$

$$\begin{array}{r} 9) \quad 6358 \\ - 6275 \\ \hline \end{array}$$

$$\begin{array}{r} 10) \quad 4260 \\ - 2128 \\ \hline \end{array}$$

$$\begin{array}{r} 11) \quad 1165 \\ - 872 \\ \hline \end{array}$$

$$\begin{array}{r} 12) \quad 5354 \\ - 3834 \\ \hline \end{array}$$

$$\begin{array}{r} 13) \quad 7435 \\ - 2107 \\ \hline \end{array}$$

$$\begin{array}{r} 14) \quad 3537 \\ - 1396 \\ \hline \end{array}$$

$$\begin{array}{r} 15) \quad 8659 \\ - 2264 \\ \hline \end{array}$$

$$\begin{array}{r} 16) \quad 5268 \\ - 335 \\ \hline \end{array}$$

$$\begin{array}{r} 17) \quad 4670 \\ - 2255 \\ \hline \end{array}$$

$$\begin{array}{r} 18) \quad 6587 \\ - 847 \\ \hline \end{array}$$

$$\begin{array}{r} 19) \quad 7457 \\ - 1392 \\ \hline \end{array}$$

$$\begin{array}{r} 20) \quad 6758 \\ - 5597 \\ \hline \end{array}$$

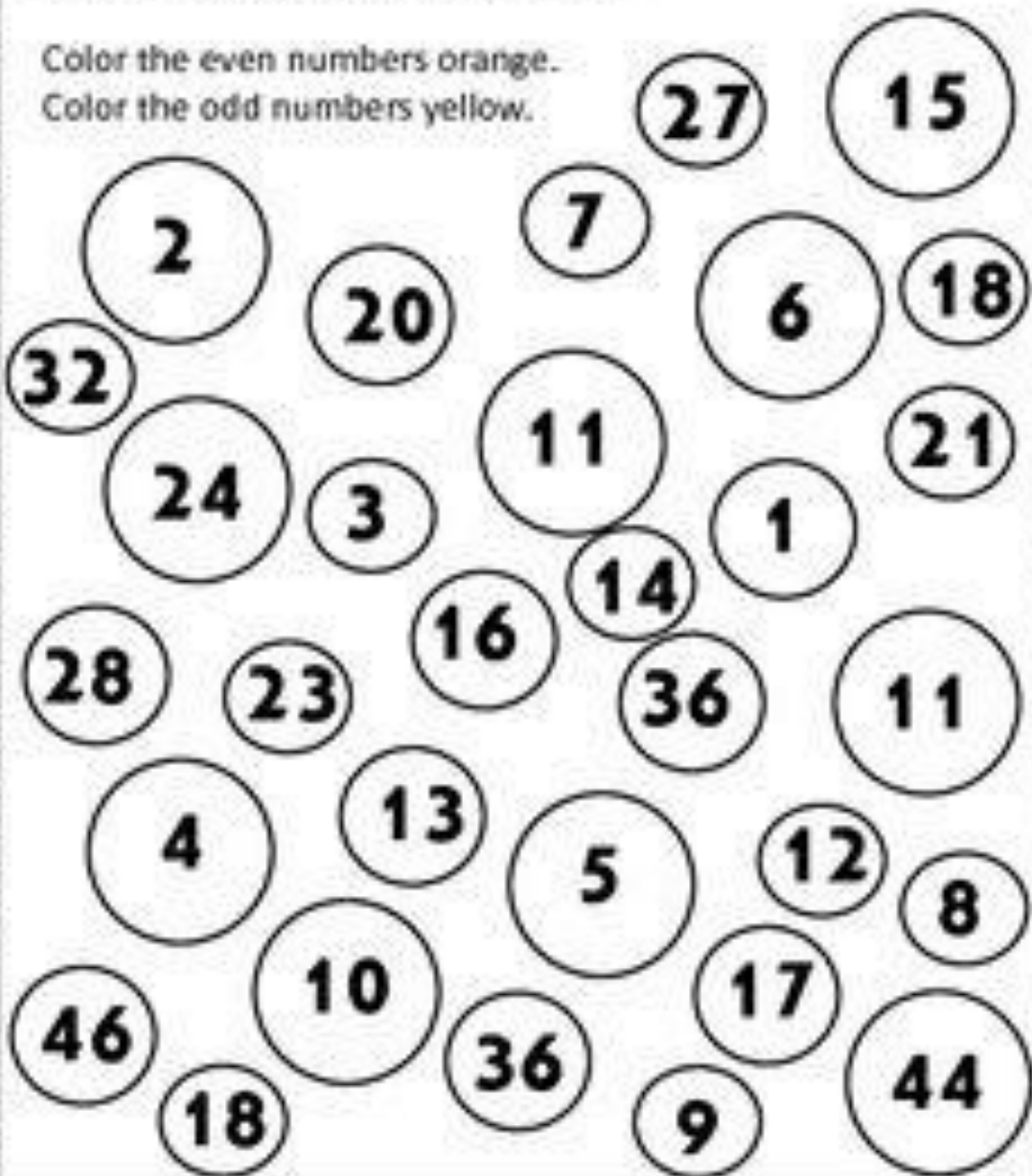
Odd and Even Numbers

Even numbers are 2, 4, 6, 8, and so on.

Odd numbers are 1, 3, 5, 7, and so on.

Color the even numbers orange.

Color the odd numbers yellow.



1. In order to start constructing the house, Charlie and his father needed to gather some wood from the forest. If they initially have 15 extra planks of wood in the house and Charlie and his father got 10 planks of wood each, how many pieces of wood do they have in total?

2. Annie's mother has also been asked to be a part of the surprise. She was tasked to be in charge of drinks. She bought 15 cans of pop and made 25 glasses of orange juice, 15 glasses of grape juice and 5 glasses of apple juice. How many glasses of juice would there be?

I. Complete with the predecessor and successor.

_____ 56 _____

_____ 22 _____

_____ 97 _____

_____ 35 _____

_____ 19 _____

_____ 84 _____

_____ 99 _____

COMPUTER

HAPPINESS IS LEARNING COMPUTER



Computer Hardware Word Scramble

Name _____

1. DC _____
2. IKNC DRAIGTRE l _____ r _____
3. MHCOONRIEP _____ i c _____ h _____
4. SEFOARWT _____ f t _____ e _____
5. SAPERKES _____ p e _____ e _____
6. MUEOSPDA _____ o _____ P _____
7. CPOMRTEU _____ m _____ t _____ r _____
8. DIAGILTCMRAEA D _____ i _____ a _____ C _____
9. KARDBOYE _____ y _____ o _____ a _____
10. MOSUE M _____ s _____
11. MOTRION M o n _____
12. PRRINTE P _____ t _____ r _____

HOW ARE YOU FEELING?



Circle the correct feeling:

- | | |
|----------|--------------|
| A) Happy | C) Tired |
| B) Angry | D) Depressed |

A- State (T) for a true and (F) for a false statement

- a) Computers give inaccurate results.**
- b) A computer works at a very high, one second is a very long time for a computer**
- c) Computers can store huge amount of data permanently.**
- d) Hard disk, the main storage device is found inside the CPU cabinet**

B- Circle the correct option:

a) Devices that are used to give instructions to the computer are called

- i) output devices**
- ii) input devices**
- iii) storage devices**
- iv) processing devices**

b) On paper a printer gives us a copy of our document. Such a copy is called at

- 1) softcopy**
- ii) paper copy**
- iii) easy copy**
- iv) hardcopy**

c) An example of computer software is.

- i) MS Paint**
- ii) Wire**
- iii) mouse**
- iv) monitor**

C- Fill in the blanks to complete the sentences-

[Diligent Speed Memory mistakes Decisions]

- a) A computer is _____ it can work for long hours.
- b) A man can make _____ while typing, but a computer is accurate.
- c) Man and computer both have _____ .
- e) A computer cannot take its own _____ .

D-Give the full form of the following acronyms:

VDU: _____


CPU: _____

DVD: _____

E- Fill the missing alphabets in the keyboard:



F- Label the different parts of the computer-



G- Read the following passage and answer the questions-

My computer

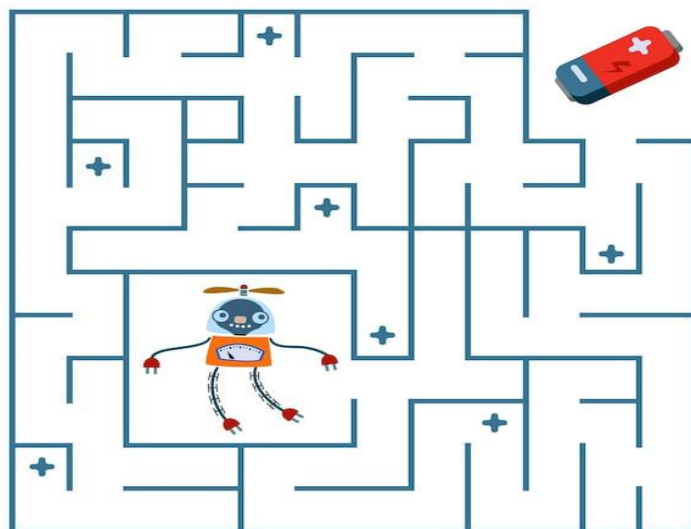
I am Asha. This is my computer. My father gifted it to me on my birthday. I love painting on computer. My brother loves to play games in it. A computer is a very useful machine.




- 1) Who gifted the computer to Asha ?
a) mother b) sister c) father
- 2) Asha loves to use ____ in the computer.
a) paint b) games c) internet
- 3) What does Asha's brother love to do in the computer?
a) watch movies b) play games c) watch cartoons
- 4) A computer is a very _____ machine.
a) useless b) complex c) useful

H- Prepare a chart on types of computers with the help of pictures. Also write few lines on them.

Help the battery to reach the Robot.



FIND THE FIVE DIFFERENCES BETWEEN THIS TWO PICTURES

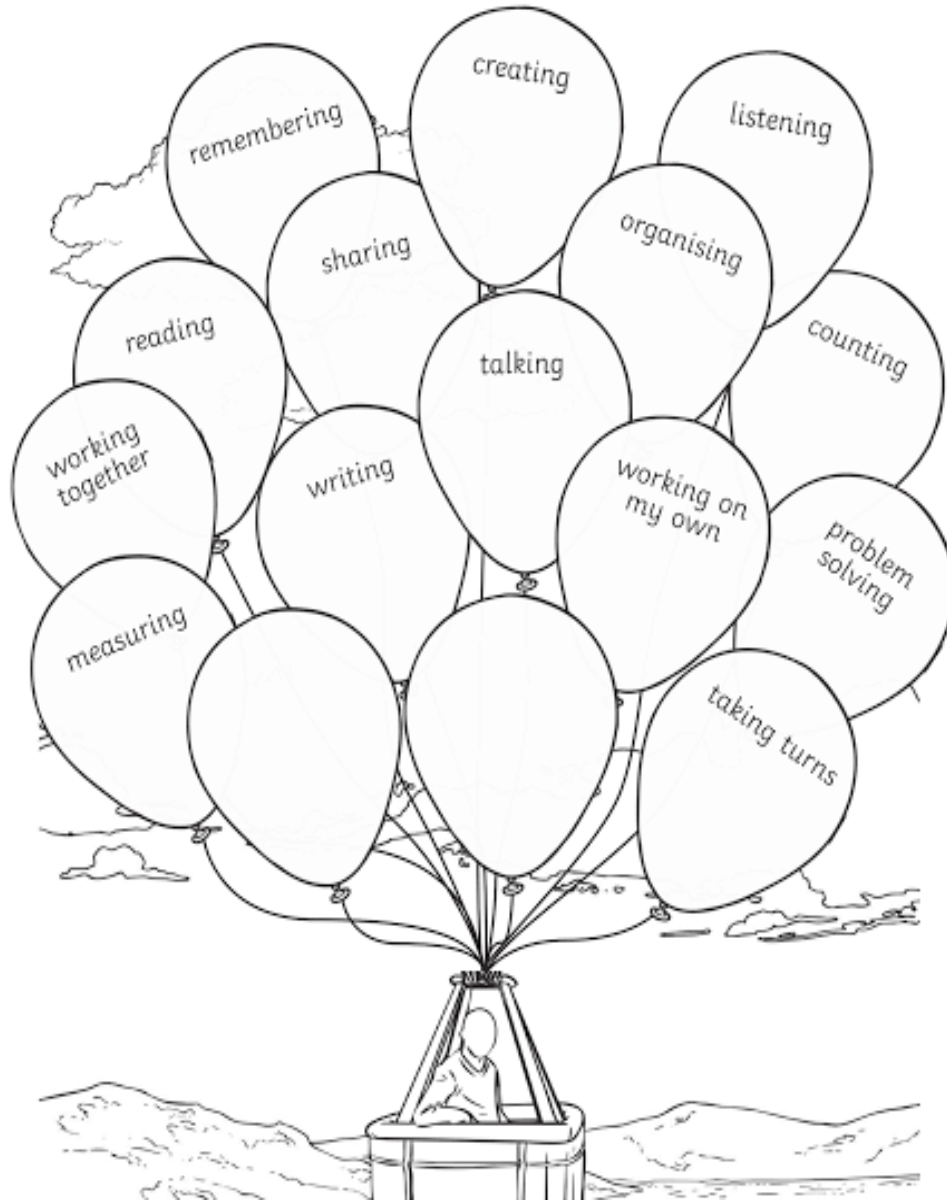


List 4 exercises you should do after sitting on computer for a long time.

- _____
- _____
- _____
- _____

My Skills

Colour the balloons to show what skills you have.
Write in any other skills you have in the blank balloons.




विषय- हिंदी


- प्र.१. अपने उस अनुभव को लिखें जब आप अपने परिवार के साथ बैठकर सबसे ज्यादा हंसी का समय व्यतीत किए थे।
- प्र.२. अपने पास के किसी एक पार्क में वृक्षारोपण करें, वह उसे करने से जो आनंद प्राप्त किया उस अनुभव को पत्र में लिखकर अपने मित्र को बताएं, एवं उसका चित्र चस्पा करें।
- प्र.३. हिंदी समाचार पत्र को पढ़कर अपने माता-पिता को समाचारों से अवगत करायें
- प्र.४. दिए गए चित्र की सहायता से अंग्रेज़ी, हिन्दी महीनों एवम ऋतुओं के नाम नीचे दी गई तालिका में लिखें।

चैत्र	(मार्च-अप्रैल)
वैशाख	(अप्रैल-मई)
ज्येष्ठ	(मई-जून)
आषाढ	(जून-जुलाई)
श्रावण	(जुलाई-अगस्त)
भाद्रपद	(अगस्त-सितंबर)
आश्विन	(सितंबर-अक्टूबर)
कार्तिक	(अक्टूबर-नवंबर)
मार्गशीर्ष	(नवंबर-दिसंबर)
पौष	(दिसंबर-जनवरी)
मघा	(जनवरी-फरवरी)
फाल्गुन	(फरवरी-मार्च)

Name of seasons	ऋतुओं के नाम	Name of months	हिंदी महीनों के नाम
Spring			
Summer			
Monsoon			
Autumn			
Winter			

प्र.५ नीचे दिए गए चित्र को देखकर आपके मन में आने वाले भाव को ५० शब्दों के छोटे अनुच्छेद में लिखें।





A decorative border of yellow and black radiation symbols (trefoil symbols) surrounds the entire page. The border is composed of small, repeating icons that form a continuous frame around the central content area.

चौदह, बाईस, पच्चीस, इक्कीस, सत्ताईस,
सताइस, पन्द्रह, उनतीस, उन्नतीस
अठारह, उन्नीस, बारह, अठाईस, सत्रह,
नौ, छह, छः, ग्यारह, ग्यारह

प्रश्न- नीचे दिए गए खाली स्थानों पर सही गिनती चुनकर लगाएँ ।

14

27

22

11

25

19

21

18

29

12

9

28

6

17

प्र.७.स्वरचित १० पंक्तियों की हास्य कविता लिखिए।

प्र.८.शब्द – सीढ़ी

*** शब्द-सीढ़ी**

संकेतों के आधार पर शब्द-सीढ़ी को पूरा कीजिए।

संकेत :

1. कठोरता का विलोम
2. जिसमें बल है
3. रक्षा करनेवाला
4. कौशल, बाजीगरी का पर्याय
5. एक वृक्ष का नाम
6. दयालु का पर्याय
7. निकट का पर्याय
8. शरीर का एक भाग
9. इसे सर्दियों में ओढ़ा जाता है
10. सच्चाई का पर्याय
11. शैतान का पर्याय

DRAWING

- Make a beautiful bird wall hanging




FUN ACTIVITIES

SPOT THE DIFFERENCE WITHIN 3 MINUTES IN THE FOLLOWING:



ALLOW TOM TO COME CLOSER TO JERRY AND HAVE FUN.



Difficulty: easy

Answer the riddles then match them with the pictures

1 - I run all around a field but never move.

What am I?



2 - I have many keys but no locks. I have space but no room. What am I?

3 - Where can you always find money when you want to?



4 - What never asks questions but is usually answered?

5 - What sounds like a parrot and is orange?

6 - What flies when its born, sits when its alive, and runs when its dead?



7 - What has an eye but cannot see at all?

8 - How do you spell mousetrap by only using 3 letters?



9 - What has a neck but no head?

10 - Where can you find cities, shops, and streets but no people?



11 - What goes up and down without moving?

12 - What room can nobody ever go inside?



MAKE FATHER'S DAY MEMORABLE FOR YOUR DAD BY GIVING HIM A BEAUTIFUL HANDMADE CARD AND CLICK YOUR PICTURE WHILE GIVING IT TO HIM. ATTACH YOUR PICTURE WITH YOUR HOLIDAY HOMEWORK.

All About My Dad

By: _____

My dad is _____ years old.

He has _____ eyes and _____ hair.

His job is _____.

 He loves to eat _____.

His favorite drink is _____.

He is really good at _____.

He always says _____.

He is happy when _____.

He is SUPER because _____.



© Lauren Thompson © Mrs. Thompson's Treasures

I thank my DAD for :

1. _____
2. _____
3. _____
4. _____

Enjoy your vacation, recite this poem in front of the mirror and learn it.

HAPPINESS

Happiness is an ice cream cone
with a chocolate coating,
and lots and lots of sprinkles.
Happiness is a child's laughter.

Happiness is the splashing of the waves
while sitting under the stars on the beach.
Happiness is the sounds of a carnival,
with rides, laughter, and games.

Happiness is winning a teddy bear
from the dart game at the fair.
Happiness is a smile
on a cloudy, dreary day.

Happiness is a smile
On a cloudy, dreary day.

Happiness is helping someone
from deep in your heart.

Happiness is a leisurely Sunday drive
down a peaceful country road.
Happiness is all of this
and much, much more.

Happiness is in your mind,
and what you make of it.
So let the children be and
Learn to find joy in their happiness.



COLOR THIS PAGE AND ENJOY YOUR HOLIDAYS.

*I want you to be
happy
to
laugh, smile
and
rejoice
in order that others may be
made happy by you*

